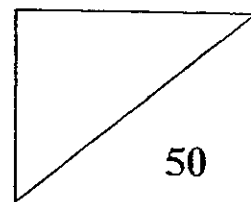


Parent's signature:

Date:



Anglo-Chinese School (Primary)  
P1 Mathematics Mini-Test



Name: \_\_\_\_\_ (     )

Class: P1 \_\_\_\_\_

Date: \_\_\_\_\_

**SECTION A: Multiple Choice (20 marks)**

Questions 1 to 10 carry 2 marks each.

Read each question carefully. For each question, four options are given. Choose the correct answer and write its number in the brackets provided.

1. 2 tens and 7 ones make \_\_\_\_\_.

(1) 5

(2) 9

(3) 10

(4) 27

(     )

2. \_\_\_\_\_ is 6 more than 13.

(1) 17

(2) 18

(3) 19

(4) 20

47 (     )

3. What is 6 tens 3 ones?

(1) 36

(2) 63

(3) 3

(4) 9

( )

4. What is the difference between 50 and 32?

(1) 18

(2) 22

(3) 28

(4) 82

( )

5. 4 groups of 5 is not the same as \_\_\_\_\_.

(1)  $4 \times 5$

(2) 4 fives

(3)  $5 + 5 + 5 + 5$

(4)  $4 + 4 + 4 + 4 + 4$

( )

6. Study the equations below carefully.

$$\star + \star + \star + \star = 16$$

$$\heartsuit + \heartsuit = 4$$

$$\heartsuit + \star = ?$$

(1) 20

(2) 12

(3) 8

(4) 6

( )

7. Study the pattern below.



Fill in the blank with the shape that comes next.

(1)

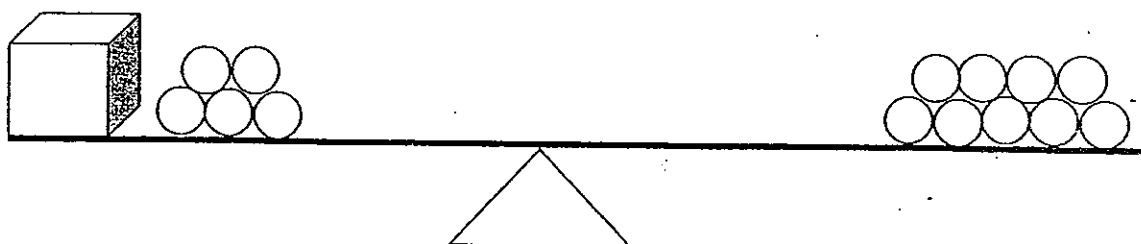
(2)

(3)

(4)

( )

8.



Each ○ stands for one unit.

The mass of the box is \_\_\_\_\_ units.

(1) 9

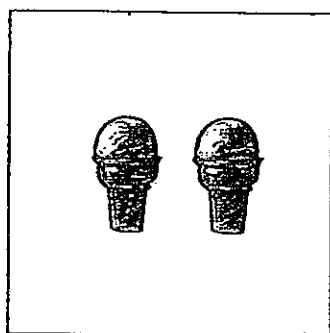
(2) 5

(3) 3

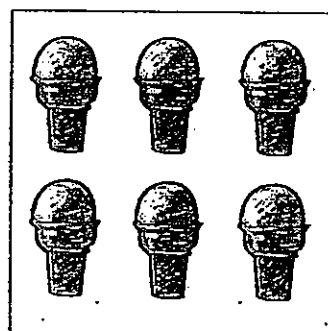
(4) 4

( )

9.



Set A



Set B

How many ice-cream cones must you move from Set B to Set A so that both sets have the same number of ice-cream cones?

(1) 1



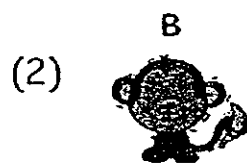


(2) 2

(3) 3

(4) 4

( )

10. Which monkey is the 5th from the right?



( )

**SECTION B: Short Answer Questions (16 marks)**

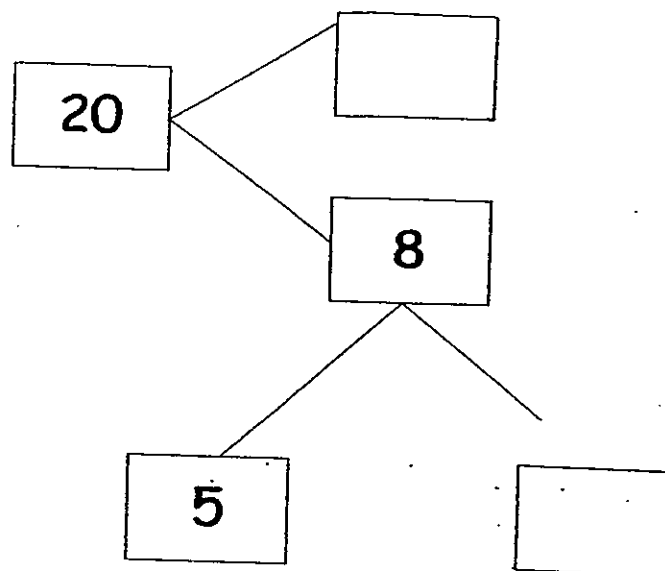
Work out Questions 11 to 17 carefully. Write the answers in the space provided.

11. Write the following numbers in words: (2 marks)

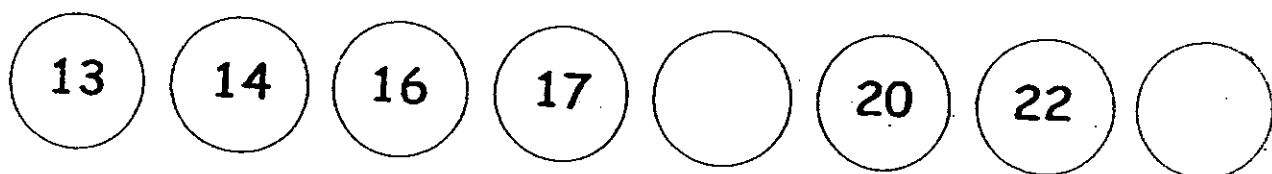
(a) 48: \_\_\_\_\_

(b) 90: \_\_\_\_\_

12. Fill in the missing numbers. (2 marks).



13. Fill in the missing numbers in the pattern below. (2 marks)





16. Look at the diagram below carefully. Fill in the blanks with the correct words in the box. (3 marks)

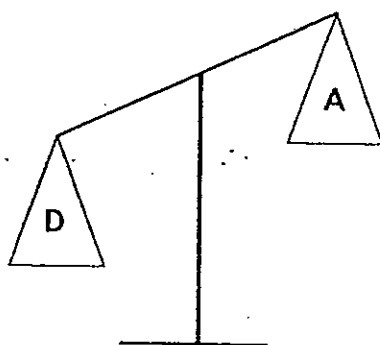
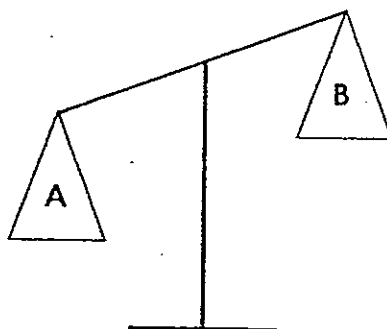
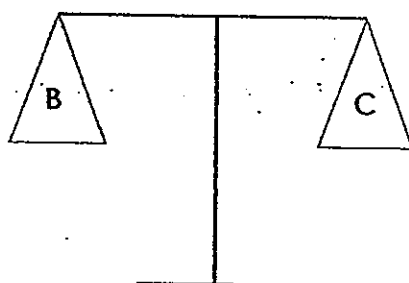
lighter than

heavier than

as heavy as

the lightest

the heaviest



(a) Box A is \_\_\_\_\_ Box B.

(b) Box B is \_\_\_\_\_ Box C.

(c) Box D is \_\_\_\_\_



17. Wendy has some apples, watermelons and pineapples.  
She wants to make fruit juice using 2 of these fruits.  
How many types of fruit juice can she make? (2 marks)  
(Hint: Make a list)



apple



watermelon



pineapple

Wendy can make \_\_\_\_\_ types of fruit juice.

SECTION C: Problem Sums (14 marks)

Read Questions 18 to 22 carefully. Show all workings clearly.

Workings

18. Jane bought 15 apples and 28 oranges from the market.

How many fruits did she buy altogether? (2 marks)

---

Jane bought \_\_\_\_\_ fruits altogether.

19. Tom had 40 marbles.

Ali had 17 marbles.

How many more marbles did Tom have than Ali?

(2 marks)

---

Tom had \_\_\_\_\_ more marbles than Ali.

Workings

20. Mrs Lee baked 30 cup cakes.  
She baked 5 more cup cakes than Mrs Tan.

(a) How many cup cakes did Mrs Tan bake? (2 marks)

---

Mrs Tan baked \_\_\_\_\_ cup cakes.


(b) How many cup cakes did Mrs Lee and Mrs Tan bake altogether? (2 marks)

---

Mrs Lee and Mrs Tan baked \_\_\_\_\_ cup cakes altogether.

21. Siti had 19 apples.

She ate 4 apples and packed the rest of the apples into equal packets of 5.



- (a) How many apples did Siti have after she ate 4 of the apples? (2 marks)

---

Siti had \_\_\_\_\_ apples left after she ate 4 of them.

- (b) How many packets of apples did Siti pack?

(2 marks)

Siti packed \_\_\_\_\_ packets of apples.

22. Mark queued up at a ticket booth to buy tickets.

He was the 4th boy from the front of the ticket booth and the 2nd boy from the back.

How many boys were queuing up at the ticket booth? (2 marks)

Ticket Booth



*(Complete the above diagram to help you find the answer)*

There were \_\_\_\_\_ boys queuing up at the ticket booth.

~ End of paper ~

109



2019年12月10日

2023年12月15日

研究問題 + 研究結果

51	52	53	54	55	56	57	58	59	60
4	4	4	4	4	4	1	4	4	4


本報編輯部：06-2611111

2009-10-29

1232.5

33148. 55

44



152410

Figure 2

Figure 1

1. 本行在境内设立分支机构，应当符合下列条件：

**High Impact Area**

◆ 本書の特色 ◆

473

第 1 章 緒論

June 1992 - 43 nights offshore

95443 - 12 - 25

Yuan had 23 research associates, 45% of whom were women.

303200... 2 = 25

any time beyond the next week.

100-25-2

[illegible]

213419 = 4 = 11

**Figure 1.** The effect of the number of trials on the mean accuracy of the responses.

400 450 500

1. What is the purpose of the document?  
 2. What are the main findings of the study?  
 3. What are the implications of the findings?  
 4. What are the limitations of the study?  
 5. What are the conclusions of the study?

25

\_\_\_\_\_

72-4347-100000 51 Income tax returns for the 1968 calendar year.

